


# 【有趣的菱形和平行四边形】小关卡4

【这个，你会做吗？】

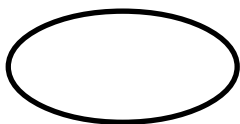
小朋友，下面图形中，哪些图形是平行四边形呢？和爸爸妈妈说一说吧~\(\quad\)/~



(1)




(2)



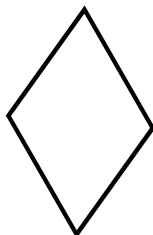
(3)




(4)



(5)



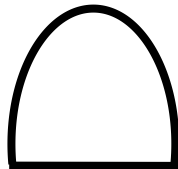
(6)



(7)



(8)



(9)

## 【有趣的菱形和平行四边形】小关卡4

【我们来练一练吧！】

$$28-16=$$

$$11+17=$$

$$14+16=$$

$$20+9=$$

$$27-12=$$

$$26-7=$$

$$22-19=$$

$$25-8=$$

$$36-9=$$

$$17+13=$$