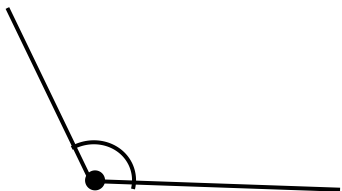


【有趣的角】小关卡2

【我来认一认】

(1) 小朋友，图上的角，你都知道它们的名字吗，快和爸爸妈妈说一说吧~



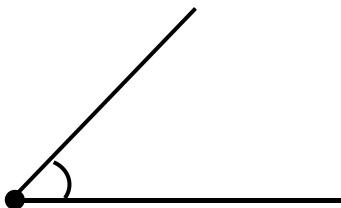
(1)



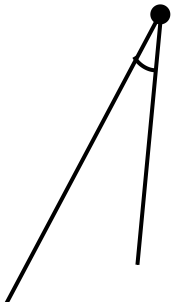
(2)



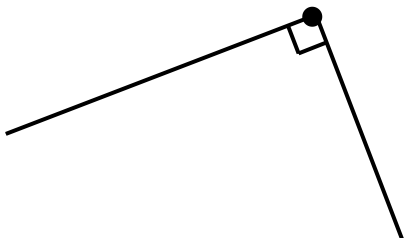
(3)



(4)



(5)



(6)

【有趣的角】小关卡2

【计算天天练】

$$16 - 7 =$$

$$22 + 10 =$$

$$14 - 6 =$$

$$12 + 8 =$$

$$17 - 9 =$$

$$16 - 11 =$$

$$19 - 13 =$$

$$24 - 19 =$$

$$20 - 9 =$$