

# 【线的关系】小关卡2

【这个，你会做吗？】

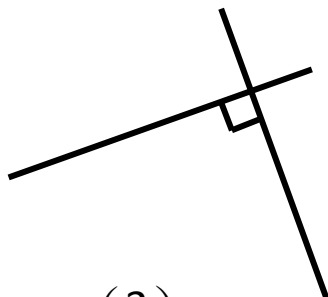
(1) 小朋友，下面的线都有关系吗？如果有，是什么关系呢？和爸爸妈妈说一说吧。



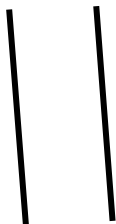
(1)




(2)




(3)



(4)



(5)



(6)

**【线的关系】小关卡2****【我们来练一练吧！】**

$19 - 5 =$

$11 + 4 =$

$24 - 11 =$

$21 - 3 =$

$6 + 16 =$

$37 - 14 =$

$21 + 14 =$

$11 + 17 =$

$46 - 19 =$

$25 + 32 =$