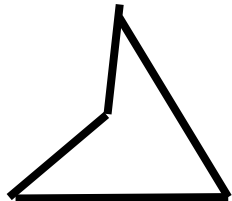



【有趣的三角形】小关卡4

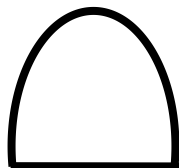
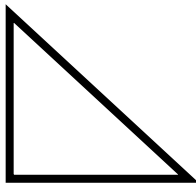
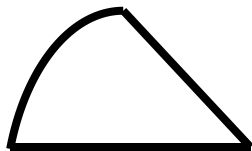
【这个，你会做吗？】

(1) 小朋友，下面每组图形中，哪个图形是三角形呢？


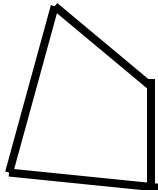
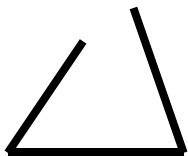
第一组：



第二组：



第三组：



【有趣的三角形】小关卡4

【我们来练一练吧！】

$$25 - 14 =$$

$$20 + 3 =$$

$$17 + 13 =$$

$$19 - 9 =$$

$$24 - 15 =$$

$$15 - 8 =$$

$$24 + 15 =$$

$$7 + 13 =$$

$$19 + 4 =$$

$$22 - 14 =$$