


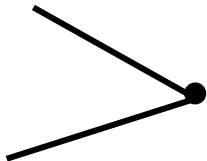
【长方形和正方形】小关卡1

【这个，你会做吗？】

(1) 小朋友，下面的图形中哪些是正方形，哪些是长方形呢？



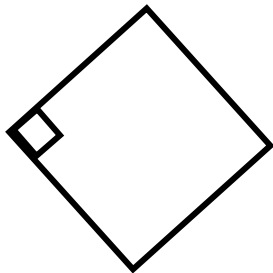
(1)



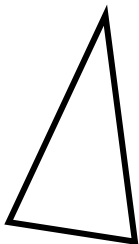
(2)




(3)



(4)



(5)



(6)



【长方形和正方形】小关卡1

【我们来练一练吧！】

$$12 + 8 =$$

$$4 + 14 =$$

$$13 + 15 =$$

$$27 - 13 =$$

$$27 - 14 =$$

$$13 + 8 =$$

$$38 - 6 =$$

$$25 - 9 =$$

$$15 + 16 =$$

$$24 - 6 =$$