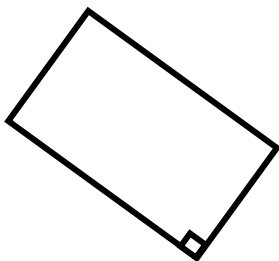



### 【正方形和长方形】小关卡3

【这个，你会做吗？】

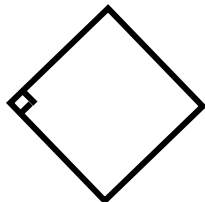

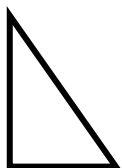
(1) 小朋友，下面的图中有什么图形呢？请你连一连吧~



三角形

正方形

长方形





### 【长方形和正方形】小关卡3

【我们来练一练吧！】

$$16 + 12 =$$

$$15 + 8 =$$

$$12 + 9 =$$

$$13 + 9 =$$

$$18 - 8 =$$

$$21 - 15 =$$

$$25 - 19 =$$

$$19 - 8 =$$

$$46 - 5 =$$

$$17 + 5 =$$