



基础计算 13 (3.13)

10以内加法

$1+6=$

$3+5=$

$1+0=$

$7+0=$

$1+4=$

$6+4=$

$0+1=$

$4+6=$

$3+2=$

$2+2=$

$9+0=$

$5+2=$

$4+5=$

$10+0=$

$2+8=$

$4+4=$

$3+4=$

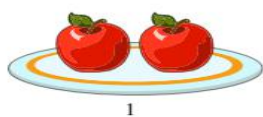
$4+4=$

$1+4=$

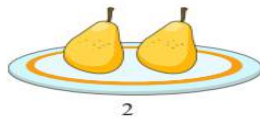
$2+1=$




给下列的水果分类，你有几种分法？请记录下来



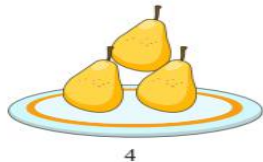
1



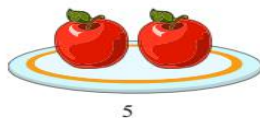
2



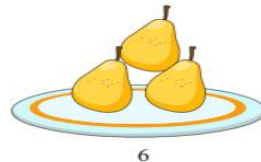
3






4




5



6



2018幼小QQ交流群



小九老师微信，扫一扫添加