

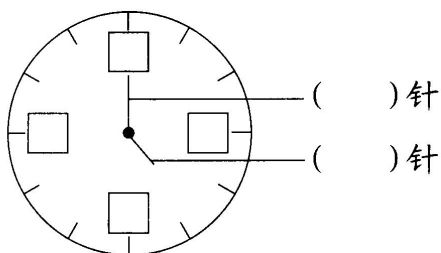
# 第七单元 达标测试卷

时间:90 分钟 满分:100 分





题号	一	二	三	四	五	六	七	八	总分	智慧园
得分										

zhōng miàn shàng quē shǎo de shù shì shén me tā men fēn bié shì shén me zhēn tián yì  
一、钟面上缺少的数是什么?它们分别是什么针?填一




tián  
填。(6分)



lián yi lián  
二、连一连。(16分)




快10时了 快5时了 6:00 9:00 6时刚过 12时 11时 5时过一点




tián yì tián

### 三、填一填。(每空2分,共20分)


1. 记录钟面上的时刻。




\_\_\_\_\_




\_\_\_\_\_




\_\_\_\_\_



\_\_\_\_\_



\_\_\_\_\_




\_\_\_\_\_

2. 钟面上时针指着9,分针指着12,这是( )时整。


3. 现在是10:00,1小时前是( ),1小时后是( )。

4. 右边是同学们参观科技馆结束的时间,已知参观用了2个小时,请问他们是( )时开始参观的。




gēn jù shí jiān huà chū shí zhēn


### 四、根据时间画出时针。(12分)




8时




2时




6时



4时




12时




10时

tā men shuō duì le ma      duì de huà      cuò de huà  
五、他们说对了吗？对的画“√”，错的画“×”。（12分）




11 时

( )




12 时

( )




6 时刚过

( )




快 10 时了

( )



过 1 时是 8 时

( )




快 12 时了


( )

xiǎng yi xiǎng      tián yi tián  
六、想一想，填一填。（18分）


1. 过 1 小时是几时？



\_\_\_\_\_




\_\_\_\_\_




\_\_\_\_\_


2. 1 小时前是几时？



\_\_\_\_\_







\_\_\_\_\_



\_\_\_\_\_

guān chá zhōng miàn shàng shí zhēn hé fēn zhēn de biàn huà nǐ néng huà chū zuì hòu yī gè  
七、观察钟面上时针和分针的变化,你能画出最后一个

zhōng miàn shàng de shí zhēn hé fēn zhēn ma  
钟面上的时针和分针吗?(8分)




qīng zhù yuán dàn biǎo yǎn kāi shǐ le  
八、庆祝元旦表演开始了。(8分)



一年级表演时间刚好是整时,时针和分针成一条直线。



一年级什么时间表演呢?请帮我画一画。



:



fù jiā tí  
九、附加题。(10分)

按要求在钟面上画出时针和分针。

