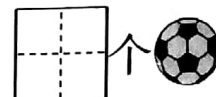



第一单元检测卷

(考试时间 90 分钟, 满分 100 分)

题号	一	二	三	四	五	六	七	八	九	总分
得分										

一、数一数, 填一填。(12 分)



二、根据数字给图形涂上颜色。(12 分)


3



6




10



5



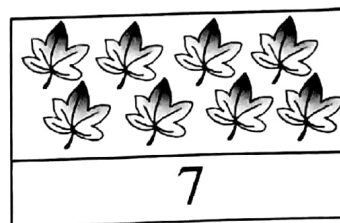
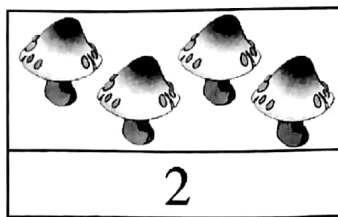

4



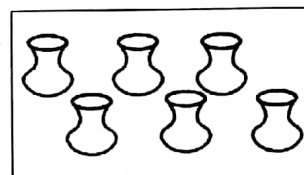
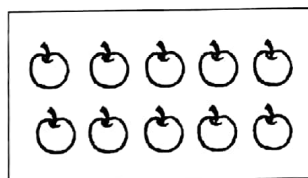
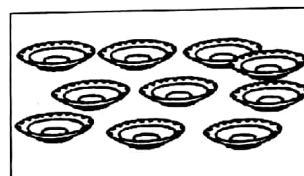

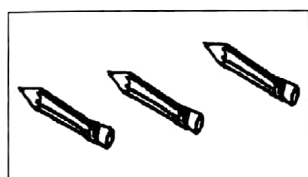

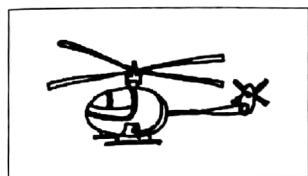
7



三、看数圈一圈。(12 分)



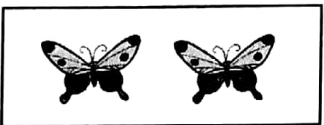




四、把数量相同的连起来。(8 分)





五、写出下面物体的个数。(12 分)



六、把同样多的用线连起来。(8分)



七、看图圈数字。(6分)



八、比一比。(20分)

1. 多的在□里画“√”，少的画“×”。(8分)


☐

☐

☐

☐


2. 最多的画“√”，最少的画“○”。(4分)


☐

☒

☐

3. 画○，画得比△多。(4分)



4. 画△，画得比○少。(4分)



九、读一读，再写数。(10分)

一去二三里，烟村四五家。

亭台六七座，八九十枝花。

你能写出诗中所有的数字吗？

