


# 10 以内加、减混合应用题 (一)

看图列式计算。



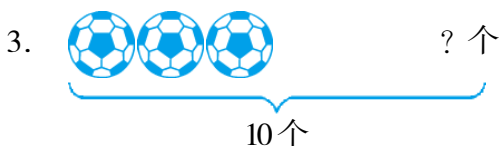
$$2 + \square = \square \quad \square + \square = \square$$

$$6 - \square = \square \quad \square - \square = \square$$




$$\square + \square = \square \quad \square + \square = \square$$

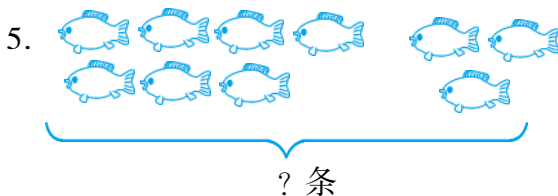
$$\square - \square = \square \quad \square - \square = \square$$



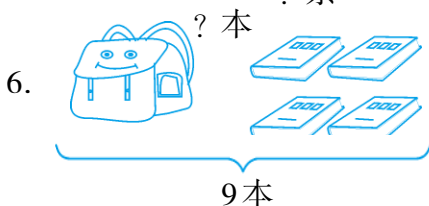
$$\square \bigcirc \square = \square \text{ (个)}$$



$$\square \bigcirc \square = \square \text{ (只)}$$



$$\square \bigcirc \square = \square \text{ (条)}$$

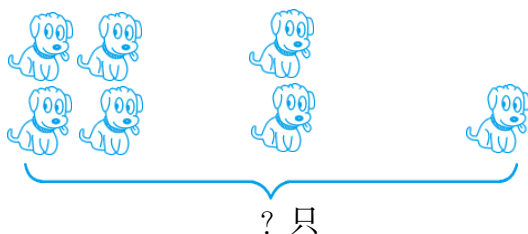


$$\square \bigcirc \square = \square \text{ (本)}$$

## 10以内加、减混合应用题(二)

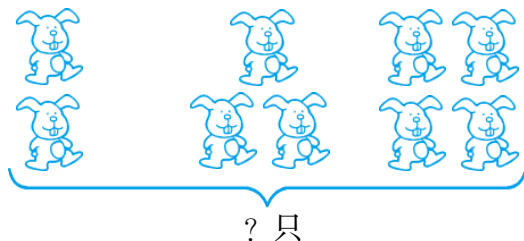
看图列式计算。

1.



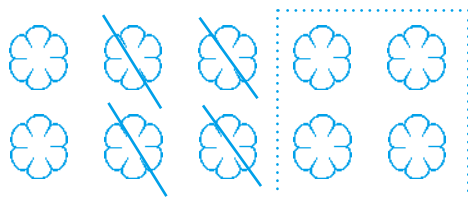
$$4 + \square + \square = \square \text{ (只)}$$

2.



$$2 + \square + \square = \square \text{ (只)}$$

3.



$$10 - \square - \square = \square \text{ (朵)}$$

4.



$$3 + \square + \square = \square \text{ (本)}$$

5.



$$4 + \square + \square = \square \text{ (只)}$$

10 以内加、减混合应用题（一）

1.  $4 + 6 = 4 + 2 + 6 = 2 + 4 + 6 = 4 + 2$

2.  $2 + 5 = 7 - 5 = 2 + 7 - 7 = 2 + 5 - 7 + 5 = 2$

3.  $10 - 3 = 7$     4.  $8 + 2 = 10$     5.  $7 + 3 = 10$     6.  $9 - 4 = 5$

10 以内加、减混合应用题（二）

1.  $4 + 2 + 1 = 7$     2.  $2 + 3 + 4 = 9$     3.  $10 - 4 - 4 = 2$

4.  $3 + 2 + 3 = 8$     5.  $4 + 2 + 3 = 9$